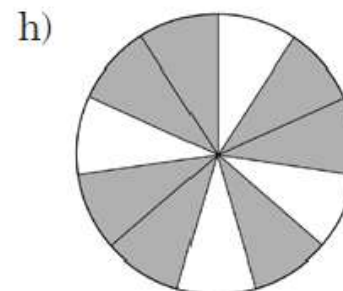
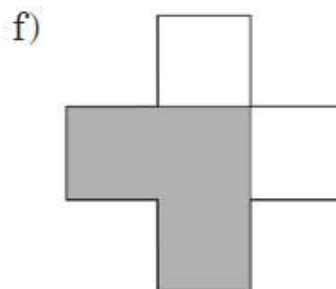
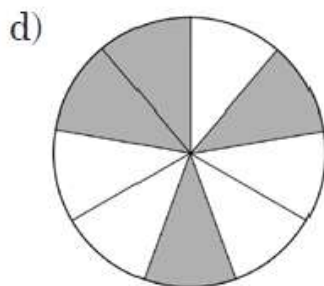
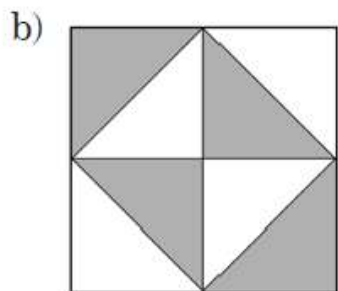
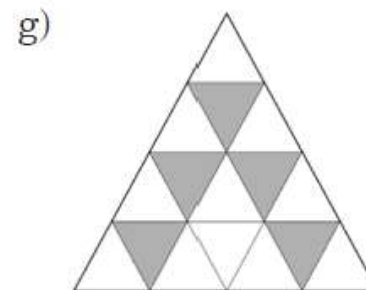
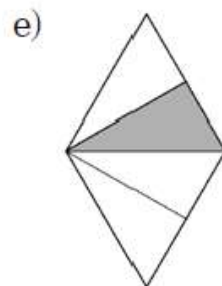

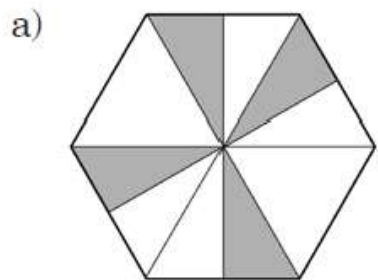


Temat: Utrwalamy ułamki

Ćwiczenie 1. Napisz, jaką część figury pomalowano.



Ćwiczenie 2. Zapisz w postaci dzielenia:

a) $\frac{12}{5}$

c) $\frac{4}{9}$

e) $\frac{13}{37}$

g) $\frac{12}{17}$

i) $\frac{39}{41}$

k) $\frac{5}{29}$

b) $\frac{7}{8}$

d) $\frac{2}{11}$

f) $\frac{29}{33}$

h) $\frac{42}{31}$

j) $\frac{28}{17}$

l) $\frac{12}{53}$